



SATISH CHANDRA MEMORIAL SCHOOL
METRER LEVEL-I EXAMINATION 2024-25
STD V

MM : 40

TIME: $\frac{3}{4}$ Hrs

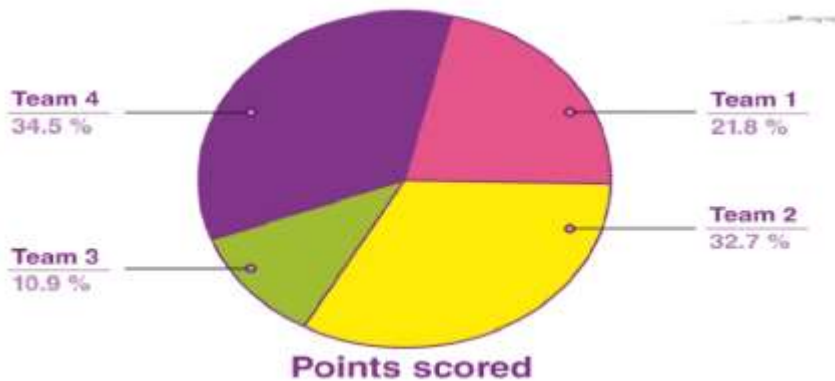
GENERAL INSTRUCTIONS:-

- » All questions are compulsory
- » Each of the 40 questions carries 1 mark each
- » Read all questions carefully before answering
- » This question paper consist 40 reasoning based questions

CHOOSE THE CORRECT OPTION FOR THE FOLLOWING QUESTIONS

- 1) If the direction is between North and East, it is called _____ direction.
- a) South-west
 - b) South-east
 - c) North-east
 - d) North-west

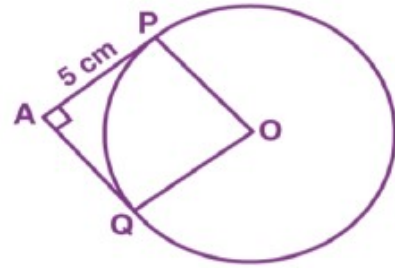
2)



From the above given figure, find out the difference between the highest and lowest points scored by the teams.

- a) 24.5%
 - b) 23.6%
 - c) 22.76%
 - d) 21.08%
- 3) Mina takes 10 minutes 15 seconds to go to school from home and Tina takes 12 minutes 10 seconds. How much time Tina takes more than Mina?
- a) 2 minutes 5 seconds
 - b) 22 minutes 25 seconds
 - c) 1 minute 5 seconds
 - d) 1 minute 55 seconds

- 4) Which is less? 1999 centimeters or 199 meters?
- a) 1999 cm
 - b) 199 metres
 - c) Both are equal
 - d) Cannot be determined



- 5) Which type of angle is $\angle PAQ$, in the above given figure?
- a) Obtuse angle
 - b) Acute angle
 - c) Right angle
 - d) Straight angle

- 6) In the given figure, in which direction is the minute hand is pointing?

- a) North-west
- b) North-east
- c) South-west
- d) South-east



- 7) Complete the pattern:- 93, 83, 73, _____, _____.

- a) 23, 33
- b) 43, 53
- c) 43, 33
- d) 63, 53

- 8) Complete the series:- 125, 80, 45, 20, _____.

- a) 5
- b) 8
- c) 10
- d) 12

- 9) In a certain code, NEWYORK is written as 111, how is NEW JERSEY written in that code?

- a) 124
- b) 134
- c) 115
- d) 145

10) Complete the series:- YX, WVU, TSRQ, _____, KJIHGF.

- a) PONML
- b) LKHM
- c) ONML
- d) ABCD

11) Find the odd one out:- January, March, October, November.

- a) January
- b) March
- c) October
- d) November

12) $2008 =$ _____

- a) $200+8$
- b) $20+0+8$
- c) $2000+8$
- d) $2+0+0+8$

13) Introducing a man, a woman said, "He is the only son of my mother's mother". How is the woman related to the man?

- a) Mother
- b) Aunt
- c) Sister
- d) Niece

14) Puppy is to dog as Kitten is to _____.

- a) Cute
- b) Cat
- c) Baby
- d) Mouse

15) Find the odd one out:- 7, 9, 11, 13

- a) 7
- b) 9
- c) 11
- d) 13

16) Which of the following words cannot be formed by using the letters of the given word: -
OBSTETRICIAN.

- a) SOBER
- b) TERMITE
- c) RETAIN
- d) SIREN

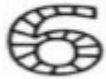
17) Find the odd one out:- Apple, Marigold, Rose, Lily.

- a) Apple
- b) Marigold
- c) Rose
- d) Lily

18) Which of the following word cannot be constructed by using the letters of the given word:- INTELLIGENCE.

- a) TILLAGE
- b) INCITE
- c) GENTLE
- d) NEGLECT

19) Find the correct mirror image of given figure.



A)	B)
C)	D)

20) Complete the series:- 5231, 5331, 5431, _____.

- a) 5131
- b) 5113
- c) 5531
- d) 5631

21) If Blue means - , and Green means +, then 6 blue 4 green 7 green 2 = _____

- a) 10
- b) 12
- c) 7
- d) 11

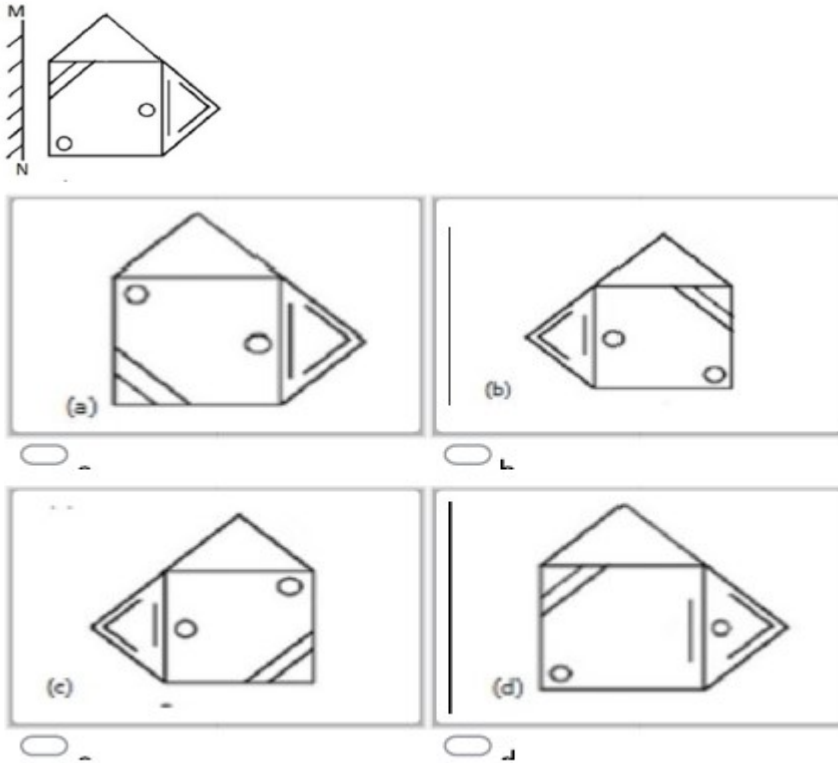
22) Complete the series:- 99, 77, 55, _____.

- a) 33
- b) 22
- c) 11
- d) 44

23) Fill in the blanks:- $7000 + 50 + 3 = \underline{\hspace{2cm}}$.

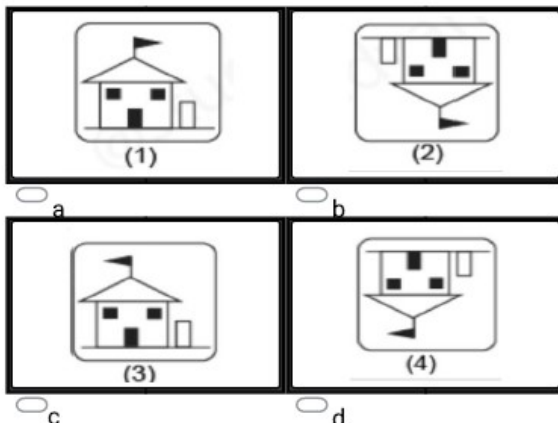
- a) 7503
- b) 7053
- c) 7553
- d) 7035

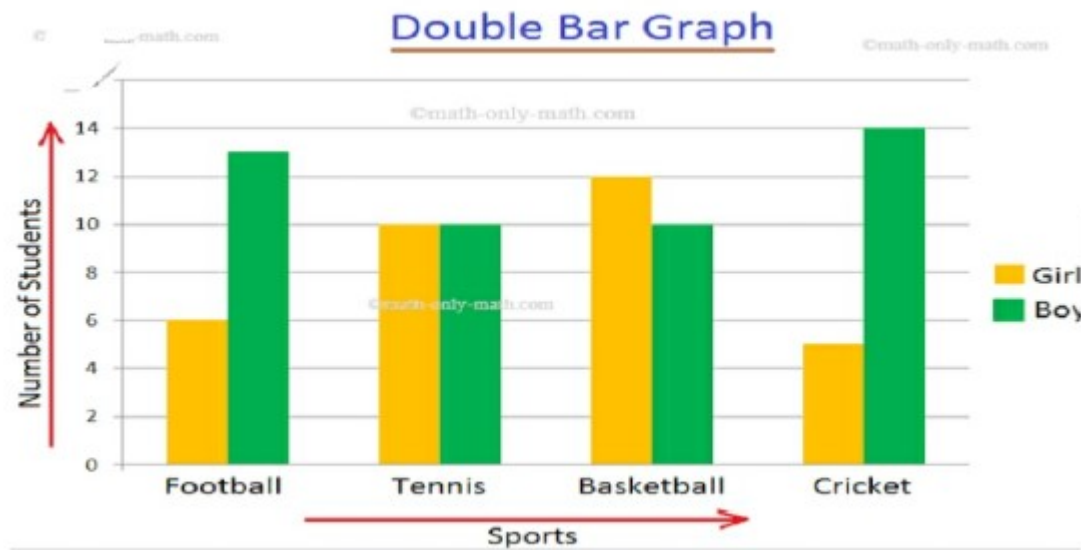
24) Find the correct mirror image of the given figure if the mirror is held vertically as shown in the picture :-



25) Find the correct mirror image of the given figure:-

Question figure:





Study the above double bar graph and answer the following question:-

26) In which sport the difference between number of girls and boys participating in the sport is greatest?

- a) Football
- b) Tennis
- c) Basketball
- d) Cricket

27) In a certain code MEAT is written as TEAM. How BALE will be written as?

- a) ALEB
- b) BEAL
- c) EALB
- d) LABE

28) Clock: Time :: Thermometer: ?

- a) Heat
- b) Radiation
- c) Energy
- d) Temperature

29) In a certain code DELHI is written as 73541, CALCUTTA is written as 82589662. How CALCUT will be written as?

- a) 8529686
- b) 5821966
- c) 8251896
- d) 9821568

30) Happy: joyful::Sad: ?

- a) Depressed
- b) Scary
- c) Silly
- d) Sleepy

31) What is the total weight of 2025 gram of potato and 1975 gram of onion?

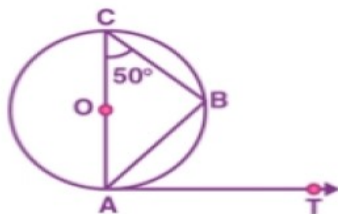
- a) Less than 4 kg
- b) More than 4 kg
- c) Equal to 4 kg
- d) Cannot be measured

32) 3m 25cm of bamboo is cut off from 5m of bamboo. How many centimeters of bamboo will be remaining?

- a) 200 cm
- b) 275 cm
- c) 175 cm
- d) 425 cm

33) In the following given figure, find $\angle BAT$ if $\angle CAB$ is 30° .

- a) 90°
- b) 70°
- c) 60°
- d) 30°



34) In a certain code COULD is written as BNTKC and MARGIN is written as LZQFHM, how will MOULDING be written in that code?

- a) CHMFINTK
- b) LNKTCHEM
- c) LNTKCHMF
- d) NITKHCMF

35) If A means +, B means \times , C means - and D means \div , then:- 7A9D3C1B0 =

- _____.
- a) 9
 - b) 11
 - c) 10
 - d) 15

36) Which number should be put in the blank from the following:- $59 + \underline{\hspace{2cm}} = 159$

- a) 0
- b) 10
- c) 100
- d) 1000

37) Fill in the blanks:- $381 = 300 + \underline{\hspace{2cm}} + 1$

- a) 8
- b) 18
- c) 88
- d) 80

38) Snake is to reptile as bear is to _____.

- a) Mammal
- b) Fish
- c) Amphibian
- d) Paws

39) $7 \times 5 \times 3 \times 0 = \underline{\hspace{2cm}}$.

- a) 45
- b) 105
- c) 35
- d) 0

40) Lucy writes the following number sentence on the board:- $400 \times \underline{\hspace{2cm}} = 0$.
Which number would go into the blank?

- a) 1
- b) 0
- c) 2
- d) 5